


Name: _____


MUSC 9 - Adduci


IC 4 - Meter ID

(10 points)


Directions: For each line (1-6), write the correct time signature after the clef.

1. 

2. 

3. 

4. 

5. 

6. 