


IC8 – Interval Drill*(10 Points)*

1. For each measure below, draw a note that is the indicated interval (either above or below) from the given note, using any necessary accidentals. Do not modify the given note.

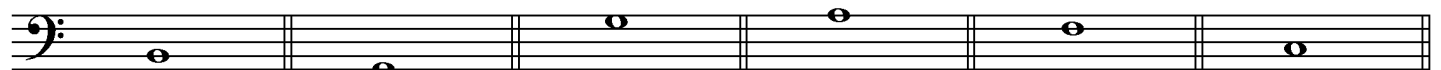
Thirds:



A musical staff in treble clef with six measures. Each measure contains a single note. Below each measure is a label indicating the interval to be drawn from that note.

M3 above m3 above m3 below M3 above M3 below m3 below

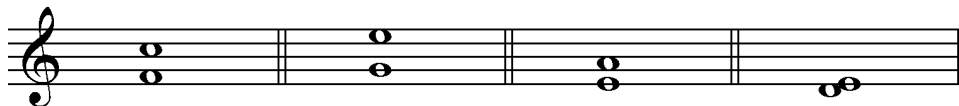
Seconds:




A musical staff in bass clef with six measures. Each measure contains a single note. Below each measure is a label indicating the interval to be drawn from that note.

M2 above m2 above M2 below m2 below M2 below m2 above

2. For each measure below, identify the size and quality of the given interval (for example, P5). Write your answer in the space below each measure.



A musical staff in treble clef with four measures. Each measure contains two notes. The intervals are: a major second (C4 to D4), a major third (C4 to E4), a perfect fourth (C4 to F4), and a perfect fifth (C4 to G4).



A musical staff in bass clef with four measures. Each measure contains two notes. The intervals are: a perfect fourth (F3 to B2), a perfect fifth (F3 to C4), a major second (F3 to G3), and a major third (F3 to A3).